

Reproduction and Development Worksheet

Name _____ Date _____ Period _____

Read what is in the boxes. Then use the pictures to answer the questions that follow.

Our bodies are adapted for reproduction.

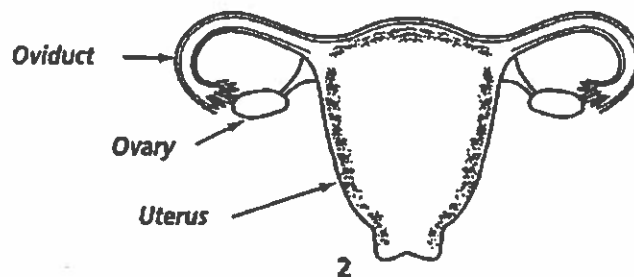
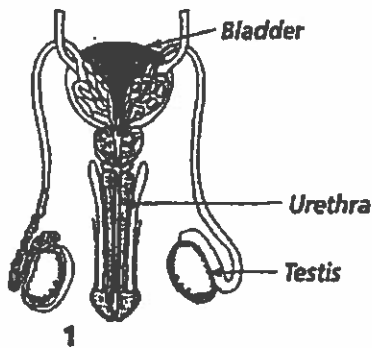
In a man, this means that:

1. sperm is produced.
2. sperm passes to the female body where it can fertilize an egg.

In a woman, this means that:

1. eggs are produced in her ovaries.
2. eggs are fertilized in her oviducts.
3. the fertilized egg is protected and nourished while it develops into a fetus.
4. the reproductive process delivers a fully developed baby.

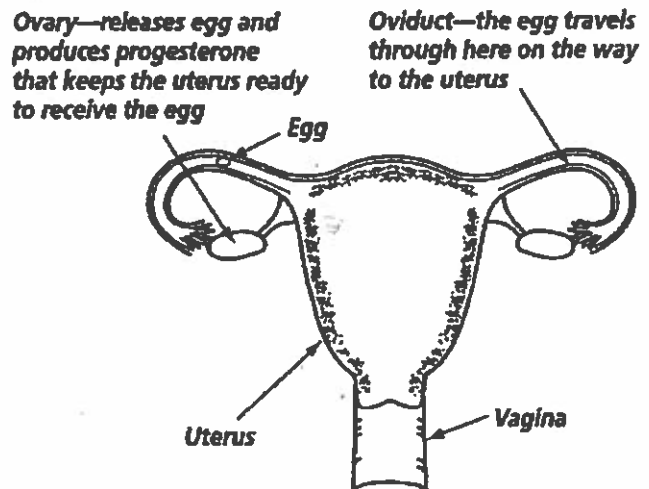
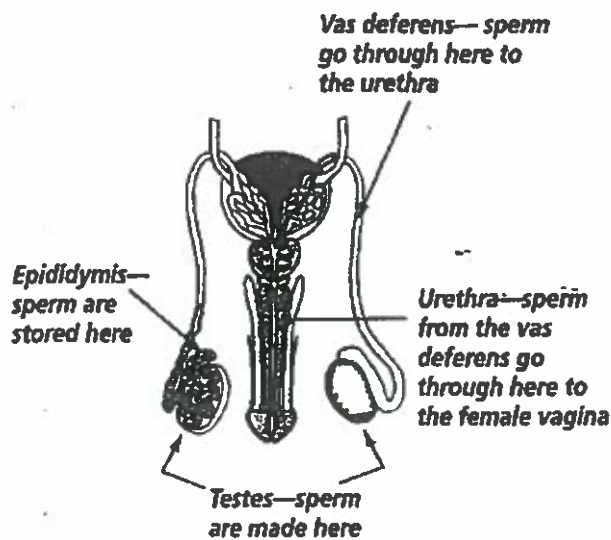
Hormones, including testosterone and estrogen, are the messengers that tell the different parts of the body what to do. In addition to controlling many body functions, they play a large role in reproduction.



1. Which picture shows the male reproductive system?
2. Write S on the picture where sperm are made.
3. Write E on the picture where the eggs are made.
4. Write F on the picture where fertilization takes place.
5. Write B on the picture where the fertilized egg develops into a fetus.

Reproduction and Development Worksheet

Study the diagram. Then fill in the blanks in the statements that follow.



1. The egg travels down the _____ to the uterus.
2. Sperm are made in the testes and stored in the _____.
3. Sperm are deposited in the vagina. To get to the vagina from the epididymis, the sperm first go through the _____ and then through the _____.
4. The ovary produces the hormone progesterone. Progesterone keeps the _____ ready to receive a fertilized egg.